

JEE Main 2020 Paper

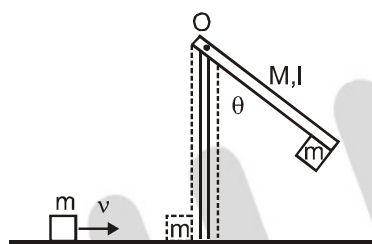


Date : 3rd September 2020

Time : 09 : 00 am - 12 : 00 pm

Subject : Physics

1. A block of mass $m = 1$ kg slides with velocity $v = 6$ m/s on a frictionless horizontal surface and collides with a uniform vertical rod and sticks to it as shown. The rod is pivoted about O and swings as a result of the collision making angle θ before momentarily coming to rest. If the rod has mass $M = 2$ kg, and length $l = 1$ m, the value of θ is approximately :
(take $g = 10$ m/s²)



- Sol.** (1) 49° (2) 63° (3) 69° (4) 55°

Applying law of conservation of momentum.

$$mv\ell = I\omega$$

$$\omega = \frac{mv\ell}{I}$$

From principle of conservation of energy.

$$\frac{1}{2}I\omega^2 = (m+M)g\ell_{\text{com}}(1 - \cos\theta)$$

$$\frac{1}{2} \frac{(mv\ell)^2}{I} = (m+M)g\ell_{\text{com}}(1 - \cos\theta) \quad (1)$$

$$I = \left(\frac{M\ell^2}{3} + m\ell^2 \right)$$

$$I = \left(\frac{2}{3} + 1 \right) = \frac{5}{3}$$

From equation (1)

$$\frac{36 \times 3}{2 \times 5} = \frac{3 \times 10 \times 2}{3} (1 - \cos\theta)$$

$$\frac{27}{50} = (1 - \cos\theta)$$

$$\cos\theta = 1 - \frac{27}{50}$$

$$\cos\theta = \frac{23}{50}$$

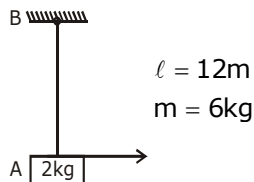
$$\theta = 63^\circ$$

JEE Main 2020 Paper



- 2.** A uniform thin rope of length 12 m and mass 6 kg hangs vertically from a rigid support and a block of mass 2 kg is attached to its free end. A transverse short wavetrain of wavelength 6 cm is produced at the lower end of the rope. What is the wavelength of the wavetrain (in cm) when it reaches the top of the rope ?
 (1) 12 (2) 3 (3) 9 (4) 6

Sol. 1



$$\mu = \frac{6}{12} = \frac{1}{2} \text{ kg/m}$$

$$A \rightarrow V = \sqrt{\frac{T}{\mu}} = f\lambda$$

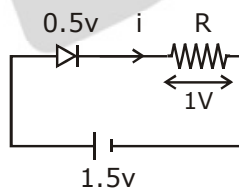
$$B \rightarrow V' = \sqrt{\frac{T'}{\mu}} = f\lambda'$$

$$\sqrt{\frac{T}{T'}} = \frac{\lambda}{\lambda'}$$

$$\sqrt{\frac{20}{80}} = \frac{6}{\lambda'} = \lambda' = 12$$

- 3.** When a diode is forward biased, it has a voltage drop of 0.5 V. The safe limit of current through the diode is 10 mA. If a battery of emf 1.5 V is used in the circuit, the value of minimum resistance to be connected in series with the diode so that the current does not exceed the safe limit is :
 (1) 300 Ω (2) 200 Ω (3) 50 Ω (4) 100 Ω

Sol. 4



$$1.5 = 0.5 + V_R \Rightarrow V_R = 1V$$

$$\text{Now as } R = \frac{V_R}{I} = \frac{1}{10 \times 10^{-3}} = 100 \Omega$$

JEE Main 2020 Paper



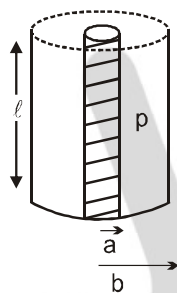
4. Using screw gauge of pitch 0.1 cm and 50 divisions on its circular scale, the thickness of an object is measured. It should correctly be recorded as :
- (1) 2.125 cm (2) 2.124 cm (3) 2.123 cm (4) 2.121 cm

Sol. 2

$$\text{Least count} = \frac{0.1}{50} = \frac{1}{500} = 0.2 \times 10^{-2} = 0.002$$

when we multiply by division no.'s
it must be even because L.C. is 0.002.

5. Model a torch battery of length ℓ to be made up of a thin cylindrical bar of radius 'a' and a concentric thin cylindrical shell of radius 'b' filled in between with an electrolyte of resistivity ρ (see figure). If the battery is connected to a resistance of value R, the maximum joule heating in R will take place for :



- (1) $R = \frac{\rho}{2\pi l} \ln\left(\frac{b}{a}\right)$ (2) $R = \frac{2\rho}{\pi l} \ln\left(\frac{b}{a}\right)$ (3) $R = \frac{\rho}{\pi l} \ln\left(\frac{b}{a}\right)$ (4) $\frac{\rho}{2\pi l} \ln\left(\frac{b}{a}\right)$

Sol. 4

$$dR = \rho \frac{dr}{2\pi r \ell}$$

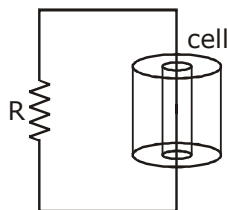
$$\int dR = \frac{\rho}{2\pi \ell} \int_a^b \frac{1}{r} dr$$

$$R = \frac{\rho}{2\pi \ell} [\ln(r)]_a^b$$

$$R = \frac{\rho}{2\pi \ell} \ln\left(\frac{b}{a}\right)$$

$$r = R$$

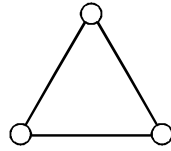
For Max heat transfer



JEE Main 2020 Paper



6. Consider a gas of triatomic molecules. The molecules are assumed to be triangular and made of massless rigid rods whose vertices are occupied by atoms. The internal energy of a mole of the gas at temperature T is :



- (1) $\frac{3}{2} RT$ (2) $3RT$ (3) $\frac{5}{2} RT$ (4) $\frac{9}{2} RT$

Sol. 2

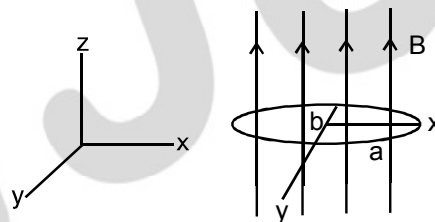
$$U = \frac{f}{2} nRT$$

$$U = \frac{6}{2} nRT$$

$$U = 3nRT \quad n = 1$$

$$U = 3RT$$

7. An elliptical loop having resistance R , of semi major axis a , and semi minor axis b is placed in magnetic field as shown in the figure. If the loop is rotated about the x -axis with angular frequency ω , the average power loss in the loop due to Joule heating is :



- (1) $\frac{\pi ab B \omega}{R}$ (2) $\frac{\pi^2 a^2 b^2 B^2 \omega^2}{R}$ (3) $\frac{\pi^2 a^2 b^2 B^2 \omega^2}{2R}$ (4) Zero

Sol. 3

$$\phi = BA \cos \omega t$$

$$\epsilon = \frac{d\phi}{dt} = BA \omega \sin \omega t$$

$$\epsilon = B \pi a b \omega \sin \omega t$$

$$\epsilon_0 = B \pi a b \omega$$

$$P = \frac{\epsilon^2}{R} = \frac{B^2 \pi^2 a^2 b^2 \omega^2}{R} (\sin^2 \omega t) \quad (\text{Average value of } \sin^2 \theta = 1/2)$$

$$P_{av} = \frac{B^2 \pi^2 a^2 b^2 \omega^2}{2R}$$

JEE Main 2020 Paper



8. A balloon filled with helium (32°C and 1.7 atm.) bursts. Immediately afterwards the expansion of helium can be considered as :

- (1) reversible isothermal (2) irreversible isothermal
(3) reversible adiabatic (4) irreversible adiabatic

Sol. 4

irreversible adiabatic \rightarrow Because Energy can not be restored, if the process is sudden.

9. When the wavelength of radiation falling on a metal is changed from 500 nm to 200 nm , the maximum kinetic energy of the photoelectrons becomes three times larger. The work function of the metal is close to :

- (1) 1.02 eV (2) 0.61 eV (3) 0.52 eV (4) 0.81 eV

Sol. 2

$$KE_{\text{max}} = \frac{hc}{\lambda_1} - \phi$$

$$3KE_{\text{max}} = \frac{hc}{\lambda_2} - \phi$$

$$3\left(\frac{hc}{\lambda_1} - \phi\right) = \frac{hc}{\lambda_2} - \phi$$

$$\frac{3hc}{\lambda_1} - \frac{hc}{\lambda_2} = 2\phi$$

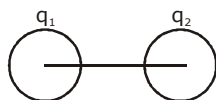
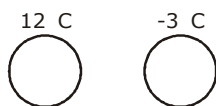
$$\frac{3 \times 1240}{500} - \frac{1240}{200} = 2\phi$$

$$\phi \approx 0.62$$

10. Two isolated conducting spheres S_1 and S_2 of radius $\frac{2}{3}R$ and $\frac{1}{3}R$ have $12\ \mu\text{C}$ and $-3\ \mu\text{C}$ charges, respectively, and are at a large distance from each other. They are now connected by a conducting wire. A long time after this is done the charges on S_1 and S_2 are respectively :

- (1) $6\ \mu\text{C}$ and $3\ \mu\text{C}$ (2) $4.5\ \mu\text{C}$ on both
(3) $+4.5\ \mu\text{C}$ and $-4.5\ \mu\text{C}$ (4) $3\ \mu\text{C}$ and $6\ \mu\text{C}$

Sol. 1



$$q_1 + q_2 = 9\ \mu\text{C} \quad \dots(1)$$

$$\frac{Kq_1}{\frac{2}{3}R} = \frac{Kq_2}{\frac{1}{3}R}$$

$$q_1 = 2q_2$$

JEE Main 2020 Paper



$$3q_2 = 9\mu c$$

$$q_2 = 3\mu c$$

$$q_1 = 6\mu c$$

- 11.** In a radioactive material, fraction of active material remaining after time t is $9/16$. The fraction that was remaining after $t/2$ is :

(1) $\frac{3}{4}$

(2) $\frac{7}{8}$

(3) $\frac{4}{5}$

(4) $\frac{3}{5}$

Sol. 1

$$N = N_0 e^{-\lambda t}$$

$$\left(\frac{N}{N_0}\right) = e^{-\lambda t}$$

$$\frac{9}{16} = e^{-\lambda t} \quad (1)$$

After $t/2$ time

$$\frac{N}{N_0} = e^{-\lambda t/2}$$

$$\frac{N}{N_0} = \left(\frac{9}{16}\right)^{\frac{1}{2}} = \frac{3}{4}$$

- 12.** Moment of inertia of a cylinder of mass M , length L and radius R about an axis passing through its centre and perpendicular to the axis of the cylinder is $I = M \left(\frac{R^2}{4} + \frac{L^2}{12} \right)$. If such a cylinder is to be made for a given mass of a material, the ratio L/R for it to have minimum possible I is :

(1) $\frac{2}{3}$

(2) $\frac{3}{2}$

(3) $\sqrt{\frac{2}{3}}$

(4) $\sqrt{\frac{3}{2}}$

Sol. 4

$$M = d \cdot V$$

$$M = d\pi R^2 L$$

$$I = M \left(\frac{R^2}{4} + \frac{L^2}{12} \right)$$

$$I = M \left(\frac{M}{4d\pi L} + \frac{L^2}{12} \right)$$

$$I = \left(\frac{M^2}{4d\pi L} + \frac{ML^2}{12} \right)$$

$$\frac{dI}{dL} = \frac{M^2}{4d\pi} \left(\frac{-1}{L^2} \right) + \frac{2LM}{12} = 0$$

JEE Main 2020 Paper



$$\frac{M^2}{4d\pi L^2} = \frac{2LM}{12}$$

$$\frac{d\pi R^2 L}{4d\pi L^2} = \frac{L}{6}$$

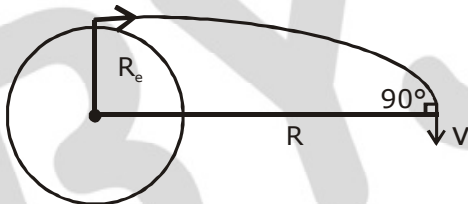
$$\frac{R^2}{L^2} = \frac{2}{3}$$

$$\frac{R}{L} = \sqrt{\frac{2}{3}} \Rightarrow \frac{L}{R} = \sqrt{\frac{3}{2}}$$

- 13.** A satellite is moving in a low nearly circular orbit around the earth. Its radius is roughly equal to that of the earth's radius R_e . By firing rockets attached to it, its speed is instantaneously increased in the direction of its motion so that it become $\sqrt{\frac{3}{2}}$ times larger. Due to this the farthest distance from the centre of the earth that the satellite reaches is R . Value of R is :

- Sol. 2** (1) $2R_e$ (2) $3R_e$ (3) $4R_e$ (4) $2.5 R_e$

$$V_0 = \sqrt{\frac{GM}{R_e}} \times \sqrt{\frac{3}{2}}$$



From conservation of angular momentum about the centre of earth
 $mV_0 R_e = mVR$

$$\sqrt{\frac{3}{2}} \sqrt{\frac{GM}{R_e}} R_e = VR$$

From conservation of energy :

$$-\frac{GMm}{R_e} + \frac{1}{2}mv_0^2 = -\frac{GMm}{R} + \frac{1}{2}mv^2$$

$$-\frac{GMm}{R_e} + \frac{1}{2}m \frac{3}{2} \frac{GM}{R_e} = -\frac{GMm}{R} + \frac{1}{2}m \frac{3}{2} \frac{GM R_e^2}{R^2}$$

$$-\frac{1}{R_e} + \frac{3}{4R_e} = -\frac{1}{R} + \frac{3 R_e}{4 R^2}$$

$$-\frac{1}{4R_e} = -\frac{1}{R} + \frac{3 R_e}{4 R^2}$$

By further calculating

$$R = 3R_e$$

JEE Main 2020 Paper



- 14.** Pressure inside two soap bubbles are 1.01 and 1.02 atmosphere, respectively. The ratio of their volumes is :

(1) 4 : 1 (2) 2 : 1 (3) 0.8 : 1 (4) 8 : 1

Sol. 4

$$P_{in} = P_0 + \frac{4T}{R_1}$$

$$1.01 = 1 + \frac{4T}{R_1}$$

$$0.01 = \frac{4T}{R_1}$$

$$0.02 = \frac{4T}{R_2}$$

$$\frac{1}{2} = \frac{R_2}{R_1}$$

$$\frac{V_1}{V_2} = \frac{8}{1}$$

- 15.** In a Young's double slit experiment, light of 500 nm is used to produce an interference pattern. When the distance between the slits is 0.05 mm, the angular width (in degree) of the fringes formed on the distance screen is close to :

(1) 0.17° (2) 0.07° (3) 0.57° (4) 1.7°

Sol. 3

$$B = \frac{\lambda D}{d}$$

$$\theta = \frac{\beta}{D} = \left(\frac{\lambda}{d} \right)$$

$$\theta = \frac{500 \times 10^{-9}}{(0.05 \times 10^{-3})}$$

$$\theta = \frac{5 \times 10^{-2}}{5} = \frac{5}{100 \times 5}$$

$$\theta^\circ = \frac{5}{100} \times \frac{180}{5 \times \pi}$$

$$\theta^\circ = 0.57^\circ$$

- 16.** A 750 Hz, 20 V (rms) source is connected to a resistance of 100 Ω , an inductance of 0.1803 H and a capacitance of 10 μF all in series. The time in which the resistance (heat capacity 2 J/°C) will get heated by 10°C. (assume no loss of heat to the surroundings) is close to :

(1) 245 s (2) 365 s (3) 418 s (4) 348 s

Sol. 4

$$f = 750\text{Hz}, V_{\text{rms}} = 20\text{V}, R = 100\Omega, L = 0.1803\text{H}$$

$$C = 10\mu\text{f}$$

$$S = 2\text{J} / ^\circ\text{C}$$

JEE Main 2020 Paper



$$Z = \sqrt{R^2 + (X_L - X_C)^2} = \sqrt{R^2 + \left(2\pi fL - \frac{1}{2\pi fC}\right)^2}$$

$$|Z| = \sqrt{(100)^2 + \left(2 \times 3.14 \times 750 \times 0.1803 - \frac{1}{2 \times 3.14 \times 750 \times 10^{-5}}\right)^2}$$

$$|Z| = 834 \Omega$$

In AC

$$P = V_{rms} i_{rms} \cos \phi$$

$$P = \left(V_{rms} \cdot \frac{V_{rms}}{|Z|} \cdot \frac{R}{|Z|} \right)$$

$$P = \left(\frac{V_{rms}}{|Z|} \right)^2 R$$

$$P = \left(\frac{20}{834} \right)^2 \times 100 = 0.0575 \text{ J/S}$$

$$P \times t = S \Delta \theta$$

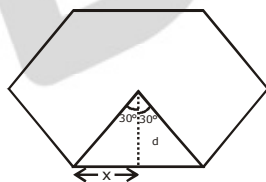
$$t = \frac{2(10)}{0.0575}$$

$$t = 348 \text{ sec}$$

- 17.** Magnitude of magnetic field (in SI units) at the centre of a hexagonal shape coil of side 10 cm, 50 turns and carrying current I (Ampere) in units of $\frac{\mu_0 I}{\pi}$ is :

- (1) $250\sqrt{3}$ (2) $50\sqrt{3}$ (3) $500\sqrt{3}$ (4) $5\sqrt{3}$

Sol. 3

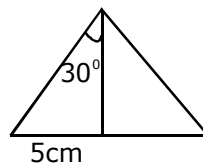


$$\tan 30 = \frac{x}{d}$$

$$d = \frac{x}{\tan 30}$$

$$d = \frac{5 \times 10^{-2}}{\frac{1}{\sqrt{3}}}$$

$$d = 5\sqrt{3} \times 10^{-2}$$



$$B = \frac{6 \times \mu_0 I N}{4\pi d} (\sin \theta_1 + \sin \theta_2)$$

$$B = \frac{\mu_0 I}{4\pi} \times \frac{50 \times 6}{5\sqrt{3} \times 10^{-2}} (\sin 30 + \sin 30)$$

$$B = \frac{10 \times 6 \times 100}{\sqrt{3} \times 4} \left(\frac{\mu_0 I}{\pi} \right)$$

$$B = 500\sqrt{3}$$

JEE Main 2020 Paper



18. The magnetic field of a plane electromagnetic wave is

$$\vec{B} = 3 \times 10^{-8} \sin[200\pi(y + ct)] \hat{i} \text{ T}$$

where $c = 3 \times 10^8 \text{ ms}^{-1}$ is the speed of light.

The corresponding electric field is :

- (1) $\vec{E} = -9 \sin [200\pi(y + ct)] \hat{k} \text{ V/m}$ (2) $\vec{E} = 9 \sin [200\pi(y + ct)] \hat{k} \text{ V/m}$
 (3) $\vec{E} = -10^{-6} \sin [200\pi(y + ct)] \hat{k} \text{ V/m}$ (4) $\vec{E} = 3 \times 10^{-8} \sin [200\pi(y + ct)] \hat{k} \text{ V/m}$

Sol. 1

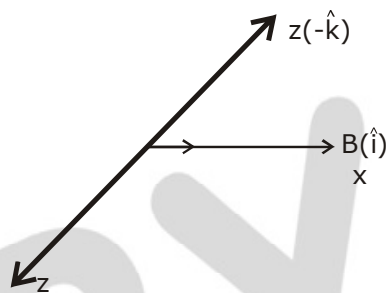
If the wave is travelling along +y direction and its direction is along $\vec{E} \times \vec{B}$

$$E = BC$$

$$E = 3 \times 10^{-8} \times 3 \times 10^8$$

$$E = 9$$

$$\vec{S} = \frac{\vec{E} \times \vec{B}}{r}$$



$$E = 9 \sin [200\pi(y + ct)(-\hat{k})]$$

19. A charged particle carrying charge $1 \mu\text{C}$ is moving with velocity $(2\hat{i} + 3\hat{j} + 4\hat{k}) \text{ ms}^{-1}$. If an external magnetic field of $(5\hat{i} + 3\hat{j} - 6\hat{k}) \times 10^{-3} \text{ T}$ exists in the region where the particle is moving then the force on the particle is $\vec{F} \times 10^{-9} \text{ N}$. The vector \vec{F} is :

- (1) $-0.30\hat{i} + 0.32\hat{j} - 0.09\hat{k}$ (2) $-3.0\hat{i} + 3.2\hat{j} - 0.9\hat{k}$
 (3) $-30\hat{i} + 32\hat{j} - 9\hat{k}$ (4) $-300\hat{i} + 320\hat{j} - 90\hat{k}$

Sol. 3

$$\vec{F} = q(\vec{V} \times \vec{B})$$

$$\vec{F} = 10^{-6} (2\hat{i} + 3\hat{j} + 4\hat{k}) \times (5\hat{i} + 3\hat{j} - 6\hat{k}) \times 10^{-3}$$

$$= 10^{-6} \begin{vmatrix} \hat{i} & \hat{j} & \hat{k} \\ 2 & 3 & 4 \\ 5 & 3 & -6 \end{vmatrix}$$

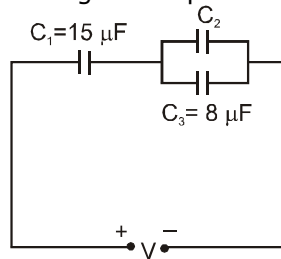
$$= 10^{-6} [\hat{i}(-18 - 12) - \hat{j}(-12 - 20) + \hat{k}(6 - 15)]$$

$$\vec{F} = (-30\hat{i} + 32\hat{j} - 9\hat{k}) \times 10^{-9}$$

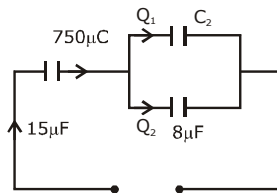
JEE Main 2020 Paper



- 20.** In the circuit shown in the figure, the total charge is $750 \mu\text{C}$ and the voltage across capacitor C_2 is 20 V . Then the charge on capacitor C_2 is :



- Sol. 3** (1) $650 \mu\text{C}$ (2) $450 \mu\text{C}$ (3) $590 \mu\text{C}$ (4) $160 \mu\text{C}$



Potential difference across C_2 & C_3 are equal

$$Q_2 = CV = 8\mu\text{f} \times 20 = 160\mu\text{C}$$

$$Q_1 = 750 - 160 = 590\mu\text{C}$$

- 21.** A person of 80 kg mass is standing on the rim of a circular platform of mass 200 kg rotating about its axis at $5 \text{ revolutions per minute (rpm)}$. The person now starts moving towards the centre of the platform. What will be the rotational speed (in rpm) of the platform when the person reaches its centre _____.

Sol. 9

$$I_1 \omega_1 = I_2 \omega_2$$

$$\left(\frac{MR^2}{2} + mR^2 \right) \omega_1 = \omega_2 \frac{MR^2}{2}$$

$$\left(1 + \frac{2mR^2}{MR^2} \right) \omega_1 = \omega_2$$

$$\left(1 + \frac{2 \times 80}{200} \right) \omega_1 = \omega_2$$

$$\omega_2 = \omega_1 \times 1.8$$

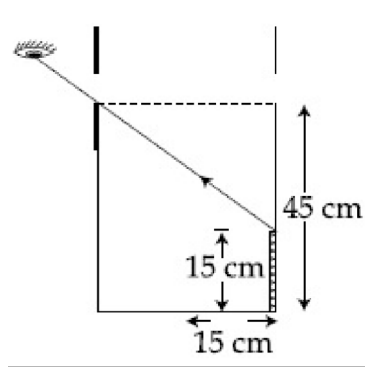
$$2\pi f_2 = 2\pi f_1 \times 1.8$$

$$f_2 = 5 \times 1.8 = 9$$

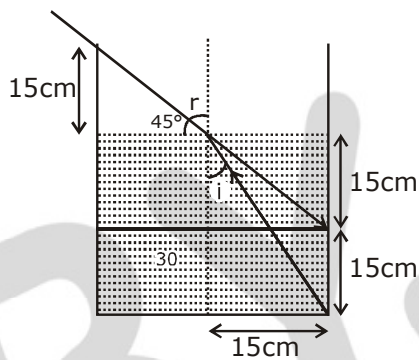
JEE Main 2020 Paper



22. An observer can see through a small hole on the side of a jar (radius 15 cm) at a point at height of 15 cm from the bottom (see figure). The hole is at a height of 45 cm. When the jar is filled with a liquid up to a height of 30 cm the same observer can see the edge at the bottom of the jar. If the refractive index of the liquid is $N/100$, where N is an integer, the value of N is _____.



Sol. 1.58



$$\mu \sin i = 1 \sin 45$$

$$\mu = \frac{15}{\sqrt{1125}} = \frac{1}{\sqrt{2}}$$

$$\mu = \frac{\sqrt{1125}}{15\sqrt{2}}$$

$$\mu = \sqrt{\frac{1125}{450}}$$

$$\mu = 1.58$$

$$\mu = \frac{N}{100} = 1.58$$

$$\Rightarrow N = 158$$

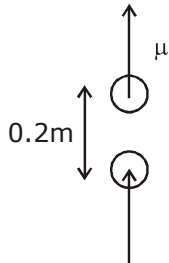
JEE Main 2020 Paper



- 23.** A cricket ball of mass 0.15 kg is thrown vertically up by a bowling machine so that it rises to a maximum height of 20 m after leaving the machine. If the part pushing the ball applies a constant force F on the ball and moves horizontally a distance of 0.2 m while launching the ball, the value of F (in N) is ($g = 10 \text{ ms}^{-2}$) _____.

Sol. 150

$$m = 0.15 \text{ kg}$$

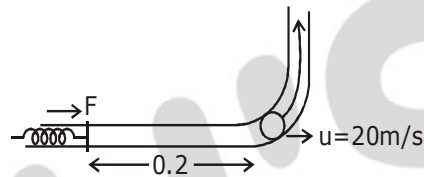


$$F \times 0.2 = mgh$$

$$F \times 0.2 = 0.15 \times 10 \times 20$$

$$F = \frac{3}{2} \times \frac{10 \times 20}{2}$$

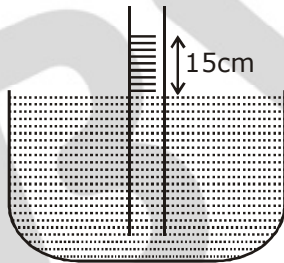
$$= 150 \text{ N}$$



- 24.** When a long glass capillary tube of radius 0.015 cm is dipped in a liquid, the liquid rises to a height of 15 cm within it. If the contact angle between the liquid and glass is close to 0° , the surface tension of the liquid, in milliNewton m^{-1} , is [$\rho_{(\text{liquid})} = 900 \text{ kgm}^{-3}$, $g = 10 \text{ ms}^{-2}$] (Give answer in closest integer) _____.

Sol. 101

$$r = 0.015$$



$$h = \frac{2T}{\rho g r}$$

$$T = \frac{h \rho g r}{2}$$

$$T = \frac{15 \times 10^{-2} \times 900 \times 10 \times 0.015 \times 10^{-2}}{2 \times 10^3}$$

$$T = 101 \text{ milli N/m}$$

JEE Main 2020 Paper



- 25.** A bakelite beaker has volume capacity of 500 cc at 30°C. When it is partially filled with V_m volume (at 30°C) of mercury, it is found that the unfilled volume of the beaker remains constant as temperature is varied. If $\gamma_{(\text{beaker})} = 6 \times 10^{-6} \text{ }^\circ\text{C}^{-1}$ and $\gamma_{(\text{mercury})} = 1.5 \times 10^{-4} \text{ }^\circ\text{C}^{-1}$, where γ is the coefficient of volume expansion, then V_m (in cc) is close to ____.

Sol. 20

For the volume to remain constant at all temperature

Exp. of the liquid = Exp. of solid

$$\Delta V = v\gamma\Delta T$$

$$V_1\gamma_1 = V_2\gamma_2$$

$$500\text{cc} \times 6 \times 10^{-6} = V_m \times 1.5 \times 10^{-4}$$

$$V_m = \frac{500 \times 6 \times 10^{-6}}{1.5 \times 10^{-4}} = \frac{30}{1.5}$$

$$V_m = 20\text{cc}$$

BYJU'S